

8 English Question Bank

Lesson 2 The Tsunami MM.20

I. Answer the questions in a few words or a sentence. 1x5= 5m

- A) Who was Ignatius ?
- B) Who was Almas Javed?
- C) How many people and animals died in Yala National Park?
- D) Which country does the Smith Family belong to ?
- E) Where did they come to and why?

II. Answer the questions briefly. 2x3=6m

- 1. Why did Tilly's family come to Thailand?
- 2. What were the warning signs that both Tilly and her mother saw?
- 3. How did Meghna save herself?

III. Write answers to the questions. 3x2= 6m

- 1. Where did the Smith family and the others on the beach go to escape from the tsunami?
- 2. What do people say about the elephants of Yala National Park?

IV. How are the Meghna and Alma's stories similar ? 3m

पाठ-3

बस की यात्रा

कक्षा 8

क्वेश्चन बैंक

प्रश्न १- डॉक्टर मित्र के कथन में कौन सा भाव छिपा था?

आदर का

सहानुभूति का

दयालुता का

व्यंग का

प्रश्न 2- लेखक और उसके मित्र दुविधा में क्यों थे?

बस की दयनीय दशा देखकर

सड़क की दयनीय दशा देखकर

डॉक्टर की बातें सुनकर

बस की सुंदरता देखकर

प्रश्न-3 लेखक को इंजन के भीतर बैठने का अनुभव क्यों हो रहा था?

सर्दियों के कारण

शोर और कंपन के कारण

ड्राइवर की निकटता के कारण

मित्रों के साथ गपशप के कारण

प्रश्न-4 बस को किसी से अधिक विश्वसनीय बताया जा रहा था?

वृद्ध महिला से

नई सुंदर बसों से

अन्य पुरानी बसों से

इनमें से कोई नहीं

प्रश्न-5 पुलिया पर बस क्यों रुक गई?

अधिक भार होने के कारण

पुलिया ऊंची होने के कारण

टायर फट जाने के कारण

इंजन खराब हो जाने के कारण

प्रश्न 6 लेखक व उसके मित्र कहां जा रहे थे?(2)

प्रश्न 7 लोगों ने उन्हें शाम वाली बस से न जाने की सलाह क्यों दी? (2)

प्रश्न 8 लेखक को बस वयोवृद्ध क्यों लगी (3)

प्रश्न 9 बस कंपनी के हिस्सेदार से लेखक ने यह क्यों पूछा कि क्या वह बस चलती है? (3)

प्रश्न 10 मां बच्चे के मुंह में दूध की शीशी लगाती है ऐसा कब और क्यों कहा गया? (4)

ପ୍ରଶ୍ନୋତ୍ତର ପାଠ୍ୟପୁସ୍ତକ

classmate

Date

Page

୧. ସ୍ୱଳ୍ପ ଲେଖନୀଙ୍କ ପ୍ରଶ୍ନର ଉତ୍ତର।

Ex 2-2

କ) ଡାକ୍ତରୀର ବାହାର ଲେଖନୀ କିଏ?

i) ରାଧାକାନ୍ତ ରାୟ ii) ଡାକ୍ତରମୋହନ ସେନାପତି iii) ବାବୁରାଜ

ଖ) କେଉଁଠି ଡାକ୍ତରମୋହନଙ୍କ ଉପାଧ୍ୟାୟ ହେବେ?

i) ମାଟିର ମଣିବ ii) ମାଟି iii) ଲୁଗା iv) ପାଣ୍ଡୁରୀ

ଗ) ଫୁଲ ବି କେଉଁ ଥାନାରେ ଚାକିରି କରୁଥିଲେ?

i) ଡେରିଆ ii) ବାଙ୍କା iii) ଘୋରୁ ଥାନା iv) ବୁକ

ଘ) ଫୁଲ ସିଂ କେଉଁ ପଦ୍ମାରେ ଅବସ୍ଥାପିତ ଥିଲେ?

i) ଡେରିଆ ii) ବିଧାନ iii) କିରଣ

ଙ) ଫୁଲ ସିଂ ମାସିକ କେତେ ଟଙ୍କା ଥିଲା?

i) ୧୦ ଟଙ୍କା ii) ୨୫ ଟଙ୍କା iii) ୨୦ ଟଙ୍କା

୨ କ) ଫୁଲ ସିଂ କେଉଁ କାଳରେ ଜଳାଜଳ ପରିଚାଳିତ?

Ex 2-4

ଖ) ଘୋରୁମାଲୁର ବାବୁ କେତେଦୂର ଉଡ଼େଇବା ବାବୁ ଜାତୀୟ ପଦ୍ମାରେ?

୩ କ) ଘୋରୁମାଲୁର ଉଡ଼େଇବା ପଦ୍ମାରେ ବାବୁ ଫୁଲ ସିଂ କାଳରେ କି କରୁଥିଲେ?

Ex 2-5

ଖ) ଫୁଲ ସିଂ ବାବୁରାଜ ପଦ୍ମାରେ କାହା ପଦ୍ମାରେ?

ଗ) ଘୋରୁମାଲୁର ପଦ୍ମାରେ ଫୁଲ ସିଂ କାହା କଲେ?

୪. ଡାକ୍ତରୀର ବାହାର ଫୁଲ ସିଂ କାହା ଅଧିକାରୀ ଥିଲା

15

Sanskrit Question Bank for Class 9

(June):

1. किसी एक श्लोक को अर्थ एवं अन्वय के साथ लिखो!

2. इन शब्दों से प्रश्न निर्माण करें----

मम, तव, एकस्मिन्, मह्यम्, त्वत्, नदी, नद्यां, कृष्णबालः!!!

3. मम देशः, मम कक्षा पर पांच पंक्तियां संस्कृत में लिखें!!

4. १. कविः काम् वीणां वादयितुं कथयति??

२. दरिद्रः बालिकां पूर्वं किं न दृष्टम्?

3. सोमप्रभा का आसीत्??

४. का स्वर्ण भवनं स्वर्णसोपानेन प्राप्तवती???

५. का वीणा वादयति कथं च???

5. वाक्य निर्माणः

यह कौन है, यह सुनील है, मेरा भाई, अमेरिका में रहता है, इंजीनियर है, वह मेरे साथ सिनेमा देखने सिनेमा हाल जाता था!!!

वह मुझसे लंबा था!!

Class-VIII
CIVICS
CHAPTER-2
QUESTION BANK

Very short answers:

1. Which country passed a law banning students from wearing any conspicuous religious or political sign or symbols?
2. What has been granted by the Indian Constitution for the religious communities regarding institution?
3. What can be the seen as the government policy of treating all religions equal in regard to government schools?
4. State any one of the objectives that ensures that Indian Constitution mandates Indian State to be secular.
5. Define Coercion.

Short answers:

1. How is the Indian State a secular State and what has it actually adopted to prevent religious domination?
2. According to Ist amendment of the US Constitution what does it prohibit?

Long answers:

1. Explain with an example that in Indian secularism the State can intervene in religious affairs.
2. Why is it important to separate religion from the State? Explain with examples.

Very long answers:

In what different ways does the Indian State work to prevent religious domination?

Question Bank

Geography

Class – VIII

Ch-2

Take the correct answers:

1. Low lying areas are susceptible to (1)
 - a. Earthquake
 - b. Landslide
 - c. Flooding
 - d. Tsunami
2. Forest and other vegetation cover (1)
 - a. Lead to soil erosion
 - b. aggravate flood
 - c. replenish underground water
 - d. None of these
3. ----- determines thickness of soil profile. (1)
4. ----- percent of the world population occupies only 30% of land area. (1)
5. ----- is a natural area designated to protect the ecological integrity of one or more ecosystems for the present and the future generations. (1)
6. What is weathering ? (2)
7. Why is freshwater the most precious substance on earth ? (2)
8. Explain three soil conservation measures. (3)
9. Explain three water conservation measures. (3)
10. Explain the factors responsible for the formation of soil. (5)

Class-VIII
CIVICS
CHAPTER-2
QUESTION BANK

Very short answers:

1. Which country passed a law banning students from wearing any conspicuous religious or political sign or symbols?
2. What has been granted by the Indian Constitution for the religious communities regarding institution?
3. What can be the seen as the government policy of treating all religions equal in regard to government schools?
4. State any one of the objectives that ensures that Indian Constitution mandates Indian State to be secular.
5. Define Coercion.

Short answers:

1. How is the Indian State a secular State and what has it actually adopted to prevent religious domination?
2. According to Ist amendment of the US Constitution what does it prohibit?

Long answers:

1. Explain with an example that in Indian secularism the State can intervene in religious affairs.
2. Why is it important to separate religion from the State? Explain with examples.

Very long answers:

In what different ways does the Indian State work to prevent religious domination?

O.P. JINDAL SCHOOL, ANGUL
QUESTION BANK

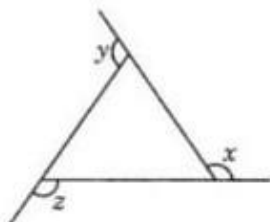
CLASS: VIII

SUBJECT: MATHEMATICS

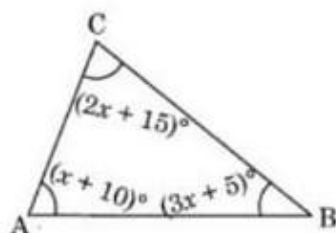
MONTH: JUNE

CHAPTER 3: UNDERSTANDING QUADRILATERALS

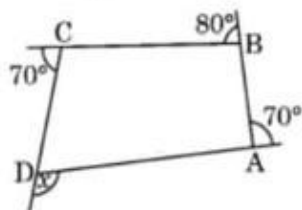
1. In the given figure find $x + y + z$.



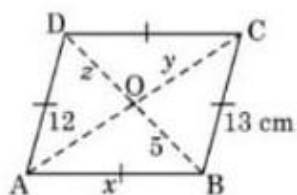
2. In the given figure, find x .



3. The angles of a quadrilateral are in the ratio of $2 : 3 : 5 : 8$. Find the measure of each angle.
4. Find the measure of an interior angle of a regular polygon of 9 sides.
5. In the given figure ABCD, find the value of x .



6. In the given figure, ABCD is a rhombus. Find the values of x , y and z .



7. A) Find the angle sum of a convex polygon with number of sides 8
b) Find the angle sum of a convex polygon with number of sides n

8. Two adjacent angles of a quadrilateral measure 130° and 40° . Find the sum of the remaining two angles.
9. How many sides does a regular polygon have if the measure of an exterior angle is 24° ?
The sum of the internal angles of a polygon is 10 right angles. Then find the number of sides.
10. The four angles of a quadrilateral are in the ratio $1 : 2 : 3 : 4$. Find the measure of its smallest angle.

O.P.JINDAL SCHOOL, ANGUL

CLASS 8 SCIENCE CHAPTER 2 QUESTION BANK

MCQ.

Microorganisms are

- I. Unicellular**
- II. Multi-cellular**
- III. Both**
- IV. None of these**

Rhizobium bacteria

- I. Help in digestion**
- II. Help in nitrogen fixation**
- III. Cause diseases**
- IV. All of the above**

Mushroom belongs to

- I. Algae**
- II. Virus**
- III. Fungi**
- IV. None of these**

Spyrogyra is

- I. An algae**
- II. A fungi**
- III. A protozoa**
- IV. A bacteria**

Paramecium is an example of

- I. Protozoa**
- II. Porifera**
- III. Algae**
- IV. Fungi**

Answer in short

Q1. What are food preservatives? Name some common food preservatives.

Q2. What are the indications required to detect spoilage in food?

Answer the following questions

Q1. Name a popular vaccination programme.

Q2. Explain the uses of Bacteria, Fungi and Algae.

Answer the question in detail

What are harmful microorganisms? Explain by giving the example of two disease carrying microbes.

QUESTION BANK FOR JUNE 2022

1. Give one word for the following:- (6 × 1 = 6) a) External agency which changes the state of a body-b) Force exerted per unit surface area-
c) An example of a contact force-
d) Envelope of air –
e) Pressure exerted by air –
f) Device used for measuring the force acting on an object-
2. Answer the following questions:- (2 × 5 = 10)
 - a) Write the factors on which pressure depends.
 - b) Write the factors affecting friction.
 - c) Name the different types of friction.
 - d) What are two types of contact forces.
 - e) Write two advantages of friction.
3. Answer the following questions :- (3 × 3 = 9)
 - a) Name the types of friction.
 - b) Write two disadvantages of friction
 - c) Write three types of non- contact forces giving one example of each type.
4. Explain in brief :-
“ Friction is a necessary evil”.
(5)